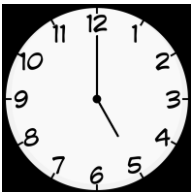



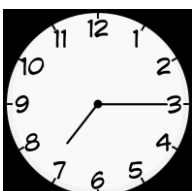





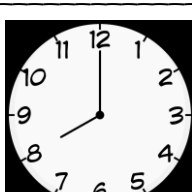

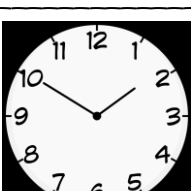

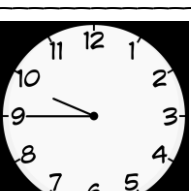


Zoek iemand die... klokken

<p>Weet hoe laat het is: _____</p>  <p>Door: _____</p>	<p>10 over drie kan tekenen</p>  <p>Door: _____</p>	<p>3 uur later kan tekenen dan 4 uur</p>  <p>Door: _____</p>	<p>Weet hoe laat het is: _____</p>  <p>Door: _____</p>
<p>Weet hoeveel tijd er zit tussen tien voor 3 en tien over 4.</p> <p>_____</p> <p>Door: _____</p>	<p>Weet hoe laat het is: _____</p>  <p>Door: _____</p>	<p>Weet hoeveel tijd er zit tussen 5 uur en 11 uur.</p> <p>_____</p> <p>Door: _____</p>	<p>Half 4 kan tekenen</p>  <p>Door: _____</p>
<p>2 uur later kan tekenen dan 9 uur</p>  <p>Door: _____</p>	<p>Weet hoeveel tijd er zit tussen half 8 en 2 uur.</p> <p>_____</p> <p>Door: _____</p>	<p>5 uur later kan tekenen dan 9 uur</p>  <p>Door: _____</p>	<p>Weet hoe laat het is: _____</p>  <p>Door: _____</p>
<p>3 uur later kan tekenen dan half 2</p>  <p>Door: _____</p>	<p>Weet hoe laat het is: _____</p>  <p>Door: _____</p>	<p>Weet hoeveel tijd er zit tussen 2 uur en half 5.</p> <p>_____</p> <p>Door: _____</p>	<p>8 uur kan tekenen</p>  <p>Door: _____</p>
<p>Weet hoe laat het is: _____</p>  <p>Door: _____</p>	<p>4 uur kan tekenen</p>  <p>Door: _____</p>	<p>Weet hoe laat het is: _____</p>  <p>Door: _____</p>	<p>Weet hoeveel tijd er zit tussen half 3 en kwart over 6.</p> <p>_____</p> <p>Door: _____</p>